

Name \_\_\_\_\_ Date \_\_\_\_\_

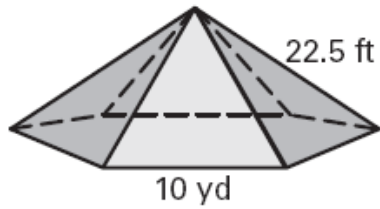
LESSON 12.3

**Practice C**

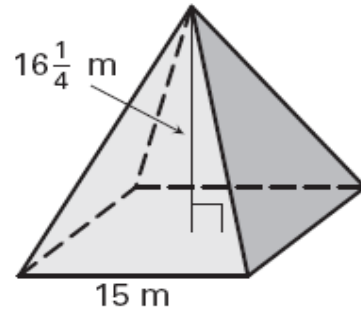
For use with pages 810–817

Find the area of each lateral face of the regular pyramid. Round your answer to two decimal places.

1.

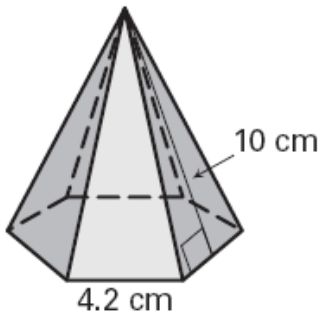


2.

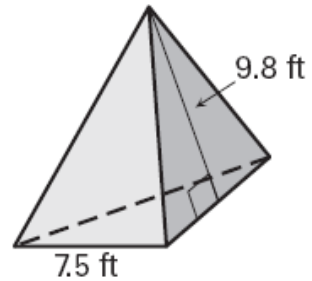


Find the surface area of the regular pyramid. Round your answer to two decimal places.

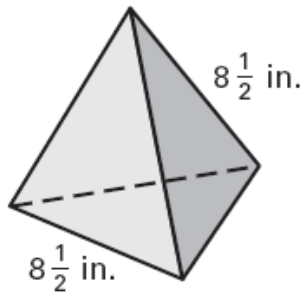
3.



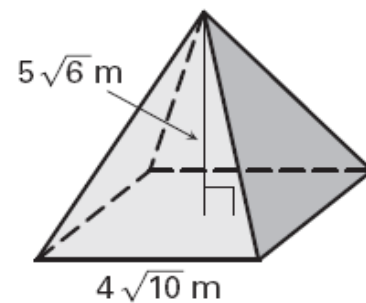
4.



5.

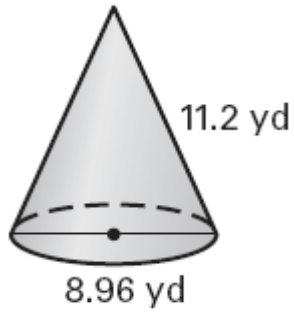


6.

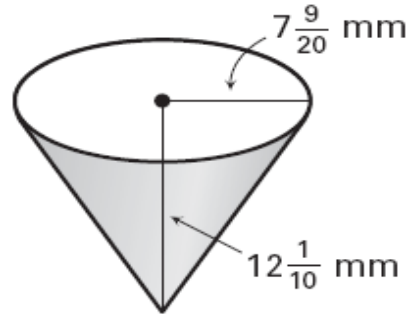


Find the lateral area of the right cone. Round your answer to two decimal places.

7.

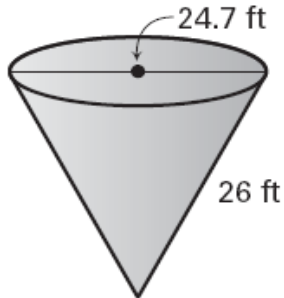


8.

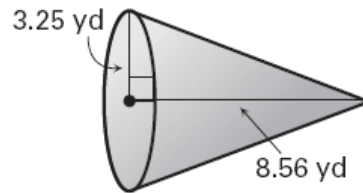


Find the surface area of the right cone. Round your answer to two decimal places.

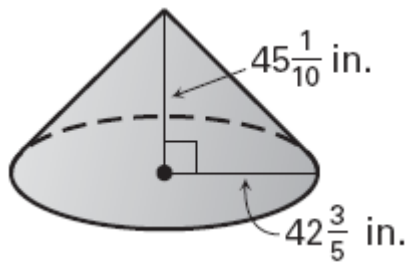
9.



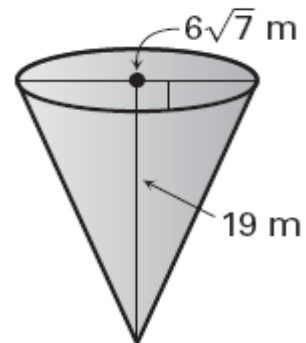
10.



11.

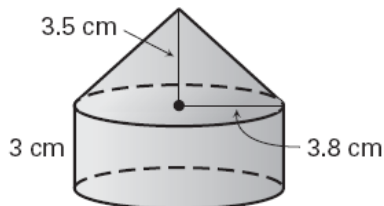


12.



Find the surface area of the solid. The pyramids are regular and the cones are right. Round your answer to two decimal places.

13.



14.

